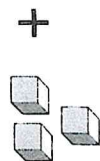
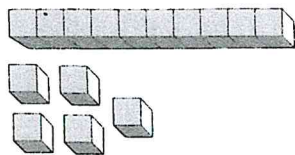


1



= ?

$$15 + 3 =$$

2

Match each number in digits to its number in words.

Number
in digits

11

7

12

2

17

Number
in words

seven

eleven

seventeen

two

twelve

2

Match each number in digits to its number in words.

Number
in digits

11

7

12

2

17

Number
in words

seven

eleven

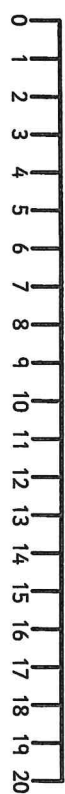
seventeen

two

twelve

7

$$20 - 7 =$$



8

What is $\frac{1}{2}$ of 16?



9

Circle the words that make each statement correct.

7

is more than

6

is equal to
is less than

15

is more than

19

is equal to
is less than

32

is more than

32

is equal to
is less than

18

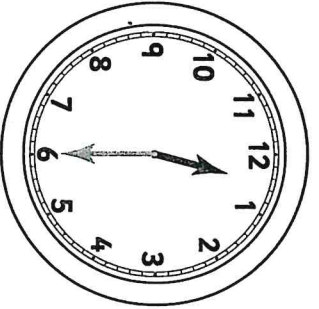
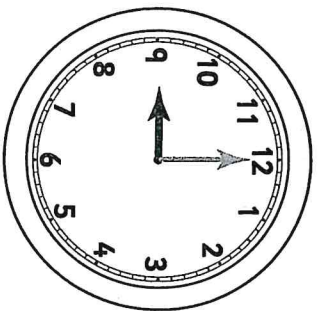
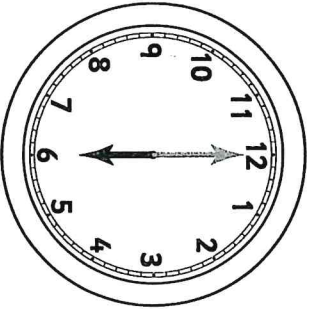
is more than

81

is equal to
is less than

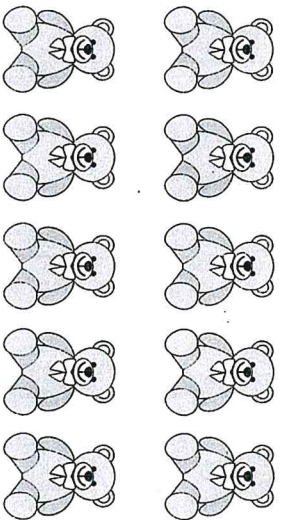
STOP

- 12 Tick (✓) the clock that shows **6 o'clock**.


☐

☐

☐

☐

- 13



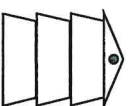
10 teddies

The shop sells **2** teddies.


How many teddies are left?

teddies

- 14 Tick (✓) the **fifth** flower.



Hive



20 badges

Emma has **11** badges.

How many badges does Tim have?


badges

20

19 Circle the number that comes next.

45 48 36

46 64



Dan adds **6** stickers.


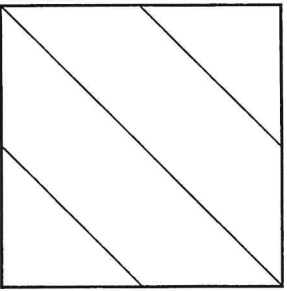
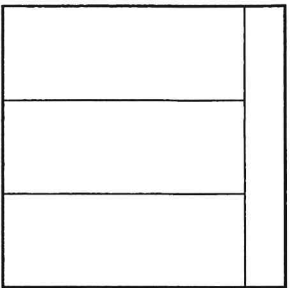
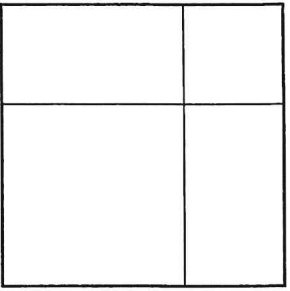
How many stickers are in the book now?



stickers

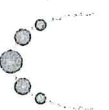
23

Tick (✓) the square that is cut into **quarters**.




24

A necklace has **5** beads.



Jas makes **7** necklaces.



How many beads does Jas use?



beads

END